

1. Convert into seconds.

(a) 8 min

(b) 6 min

(c) 25 min.

2. Convert into minutes

(a) 240 s

(b) 105 s

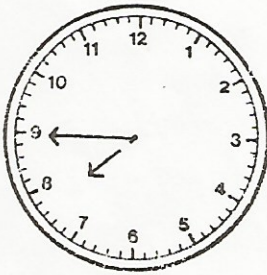
(c) 750 s.

3. Complete Table 1

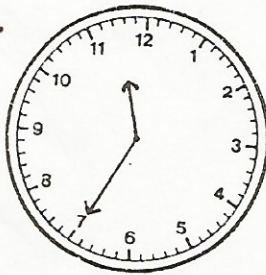
Table 1

HOURS	7		15		$4\frac{3}{4}$	
MINUTES		330		135		66

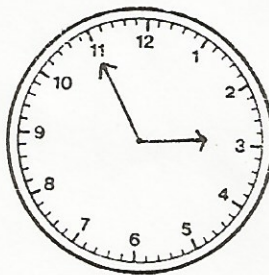
4. Write down the time indicated on each clockface using the word 'to'.



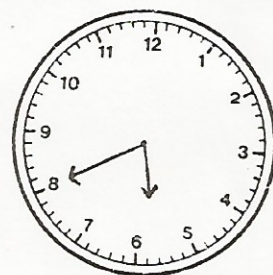
(a)



(b)

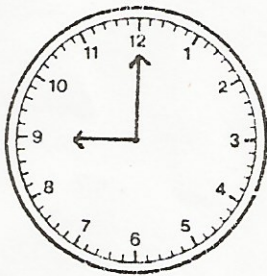


(c)

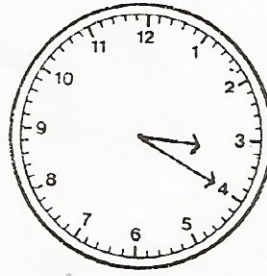


(d)

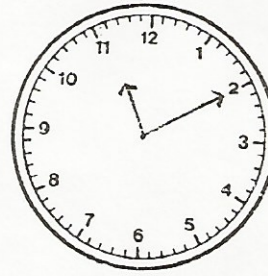
5. Write down the time shown on each clockface.



(a)



(b)



(c)

6. Write in figures (using a.m or p.m).
- Twenty five past eight in the morning.
 - Quarter past eight in the morning.
 - Five to four in the afternoon.
 - Ten to seven in the afternoon.
7. How many (a) hours are there from 10.15 a.m to 11.45 a.m?
(b) minutes are there from 11.50 a.m to 1.25 p.m?
8. A factory opens at 7.45 a.m and closes at 5.15 p.m. How long does it remain open?
9. A film show, starting at 8.10 p.m, lasted for 2 h 35min. At what time did it end?
10. A bus from Curepipe reaches Chemin Grenier at 8.05 a.m after travelling for 1 h 10 min. At what time did it leave Curepipe?
11. Rajoo works from 8.45 a.m to 12.30 p.m and Kader works from 12.30 p.m to 6 p.m. By how long does Kader work more than Rajoo?
12. Complete Table 2.

Table 2

Year	Leap	Common
1976		
1982		
1984		
1996		
1999		

13. How many days are there from :
- (a) 19 June to 3 August.
 - (b) 1 February to 20 March 1995.
 - (c) 12 September to 28 November.
14. The Mauritius Pride arrived at Port Louis harbour on 22 June and left for Rodrigues 13 days later. On what date did it leave for Rodrigues?
15. A contractor starts building a house on 9 April and finishes on 12 July. How many weeks does the work last?
16. School holidays starts on 17 July and ends on 22 August. Find out (in days) the duration of the school holidays.

Table 2

Year	Leap	Common
1978		
1982		
1984		
1988		
1992		